

Name:

Datum:

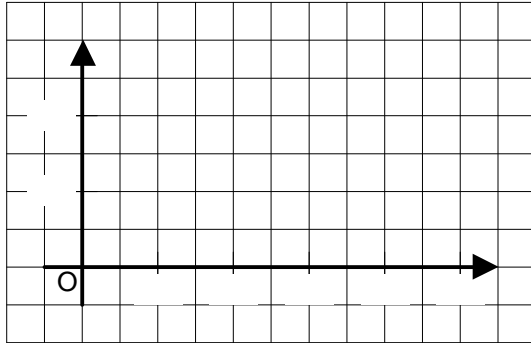
Proportionale Funktionen - Wertetabelle in Graph

Arbeitsauftrag:

Beschrifte und skaliere jeweils zuerst das Koordinatensystem und zeichne dann den Graph der zu der Wertetabelle gehörenden Proportionalen Funktion.

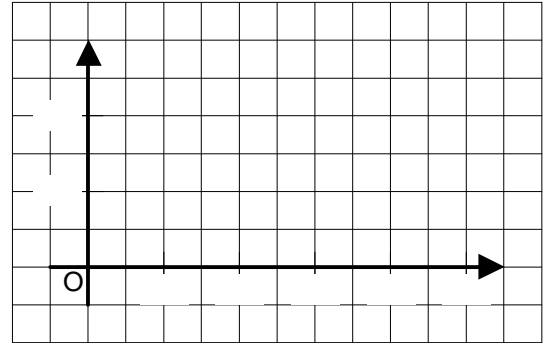
a)

a	1	2	4	6
b	0,125	0,250	0,500	0,750



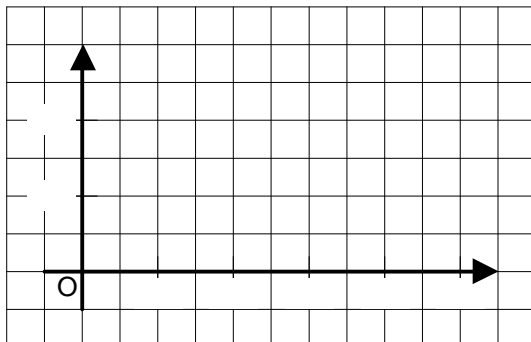
b)

m	0,2	0,4	0,6	0,8
n	3	6	9	12



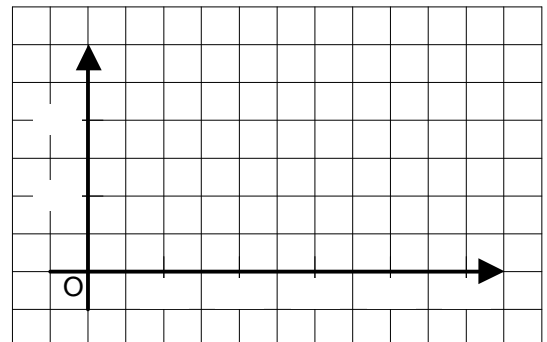
c)

G	5	10	15	20
B	120	240	360	480



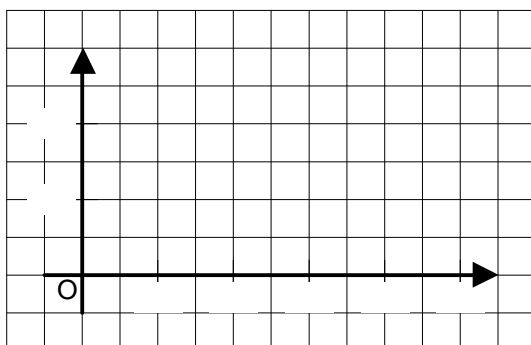
d)

m	0,1	0,2	0,4	0,8
l	200	400	800	1600



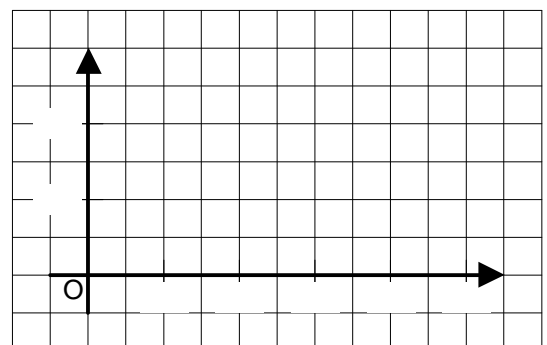
e)

x	2,5	5	10	20
y	5	10	20	40



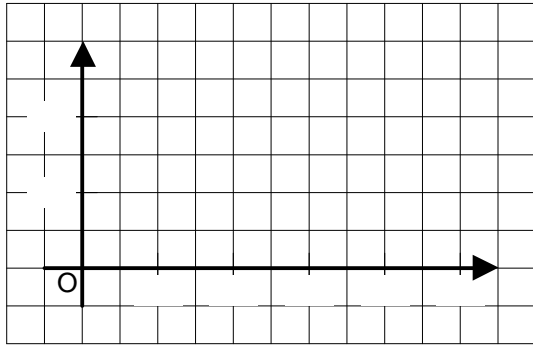
f)

G	50	100	250	500
H	0,05	0,10	0,25	0,50



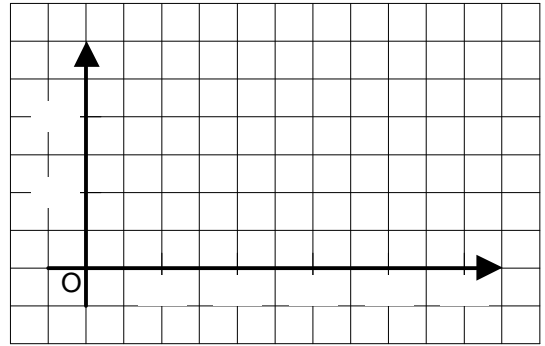
g)

F	1	2	4	5
a	3,3	6,6	13,2	16,5



h)

U	$\frac{1}{5}$	2	4	5
J	10	100	200	250



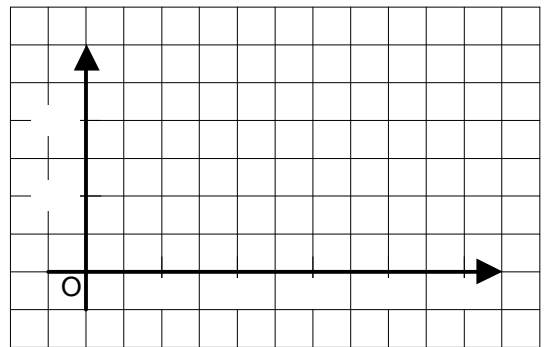
i)

y	$\frac{1}{2}$	1	$1\frac{1}{2}$	2
x	17	34	51	68



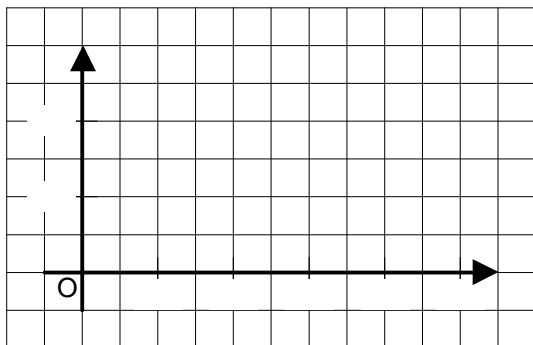
j)

N	30	90	270	810
M	0,90	2,70	8,10	24,30



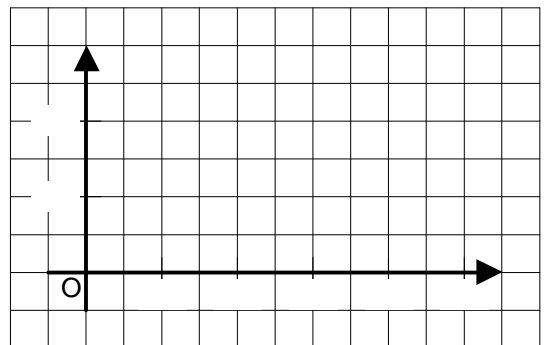
k)

e	5	10	15	20
f	13	26	39	52



l)

t	0,5	1,0	1,5	2,0
x	$1\frac{1}{2}$	3	$4\frac{1}{2}$	6



m)

m	3	6	9	12
a	5	10	15	20



n)

x	17	34	51	68
z	12,0	24,0	36,0	48,0

